

Name: _____

Grade: _____

Date: _____

MATH ASSESSMENT



Think about what you've learned so far

NUMERAL RECOGNITION

Fill in the blanks with right name of each number!

3	2	5	7	4
<input type="text"/>	<input type="text"/>	<input type="text"/>	<input type="text"/>	<input type="text"/>
1	8	0	9	3
<input type="text"/>	<input type="text"/>	<input type="text"/>	<input type="text"/>	<input type="text"/>

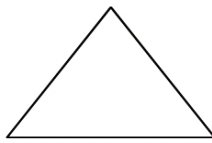
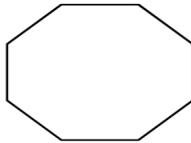
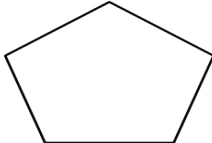
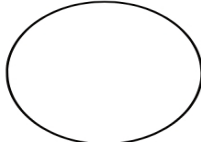
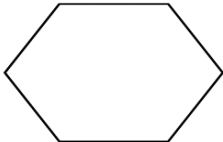

COUNTING

Count the additions and subtractions below!

$3 + 5 =$ <input type="text"/>	$7 + 4 =$ <input type="text"/>	$2 + 9 =$ <input type="text"/>
$4 - 2 =$ <input type="text"/>	$9 + 3 =$ <input type="text"/>	$8 + 7 =$ <input type="text"/>
$8 + 7 =$ <input type="text"/>	$4 + 4 =$ <input type="text"/>	$7 - 4 =$ <input type="text"/>

SHAPES

Fill in the blanks with the correct name of each shape!

	<input type="text"/>		<input type="text"/>		<input type="text"/>
	<input type="text"/>		<input type="text"/>		<input type="text"/>