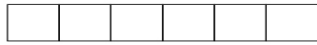



Spring Measure

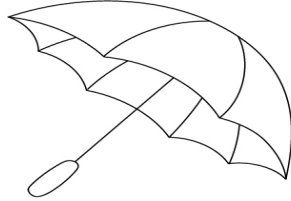
Count the cubes used to measure each picture. Write the number on the line.



Cube: _____




Cube: _____





Cube: _____



Cube: _____



Cube: _____



Cube: _____