

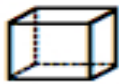
Name: _____

Date: _____

Polyhedron Nets

Match each of the following 3-D shapes to the appropriate net.

1.



2.



3.



4.



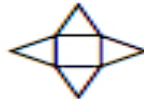
5.



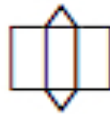
6.



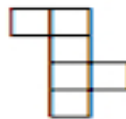
A.



B.



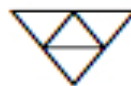
C.



D.



E.



F.

