

Name : \_\_\_\_\_

Score : \_\_\_\_\_

### Solid Nets

Choose the correct net for each solid shape.

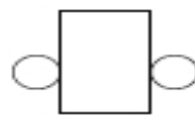
1)



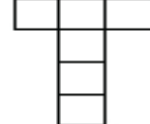
a)



b)



c)



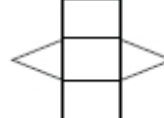
2)



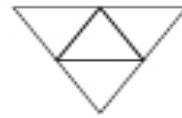
a)



b)



c)



3)



a)



b)



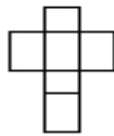
c)



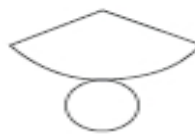
4)



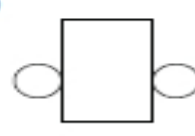
a)



b)



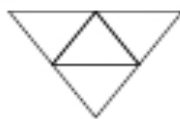
c)



5)



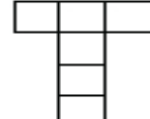
a)



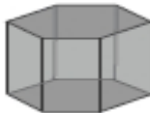
b)



c)



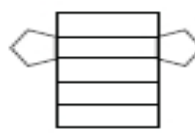
6)



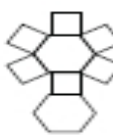
a)



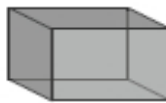
b)



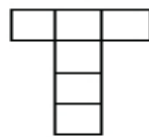
c)



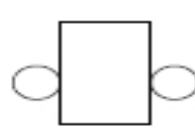
7)



a)



b)



c)

