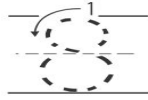

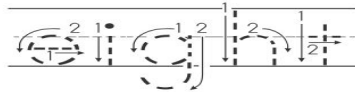



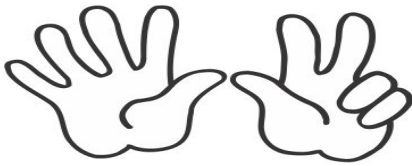
Is eight EVEN or ODD?
Color blue if even
and red if odd.



This is a 10 frame. Can you show what 8 looks like in a 10 frame.



Cut the numbers out at the bottom of the page.
Answer the questions below and glue the numbers in the correct spots.



8 is 5 plus

$8 - 2 = \square$

$4 + \square = 8$

$2 + 6 = \square$

+ 1 = 8

$8 - 3 = \square$

$8 + \square = 8$

+ 7 = 8

$8 - 6 = \square$

