

Name: _____
Date: _____

Subject: Year 2 Numeracy
Unit: 3-D shapes

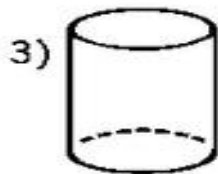
Name the following 3-D shapes:



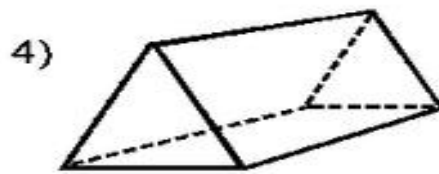
sphere



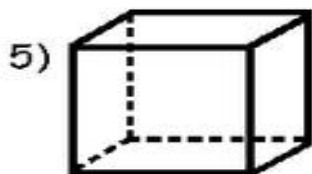
cone



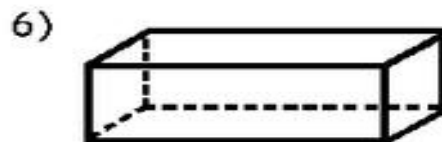
cylinder



triangular prism



cube



cuboid