



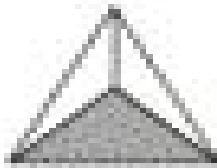




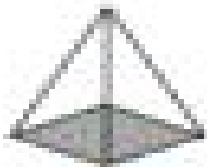
Name: _____

Date: _____



10 SHAPE PROPERTIES SHEET 3

Fill in the name, and number of faces, edges and vertices for each shape.

Name: F: E: V:		Name: F: E: V:	
Name: F: E: V:		Name: F: E: V:	
Name: F: E: V:		Name: F: E: V:	
Name: F: E: V:		Name: F: E: V:	

F = FACES, E = EDGES, V = VERTICES

