



Tens and Ones Grouping


Circle the groups of ten apples in each set and write your answer in the box on the right.
 (Find the answers at the bottom of the page.)



Tens



Tens



Tens