

Name: \_\_\_\_\_


Date: \_\_\_\_\_

# SUBTRACTION With Star

In each case, subtract and write the correct number of objects.






$5 - 2 = \text{-----}$


$8 - 3 = \text{-----}$


$7 - 4 = \text{-----}$


$9 - 2 = \text{-----}$


$8 - 6 = \text{-----}$


$5 - 5 = \text{-----}$