

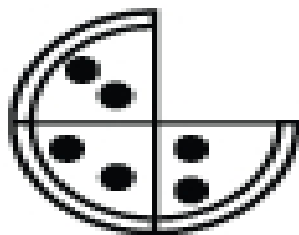
Elementary Math Worksheet

2nd Grade Math Worksheet

Learning Fractions

NAME _____

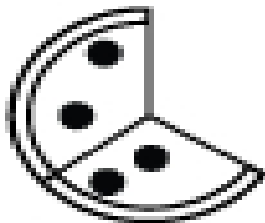
Circle the correct fraction that shows how many pizza slices are gone.



$$\frac{1}{3}$$

$$\frac{1}{4}$$

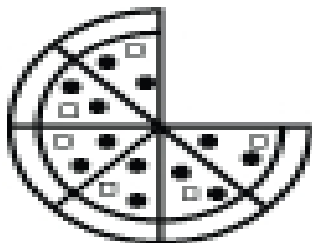
$$\frac{1}{5}$$



$$\frac{1}{3}$$

$$\frac{1}{4}$$

$$\frac{1}{5}$$



$$\frac{2}{5}$$

$$\frac{2}{6}$$

$$\frac{2}{8}$$