

Week 1: Day 1

Addition

Find the sums for each problem below.

38	67	85
$+24$	$+24$	$+48$
\hline	\hline	\hline

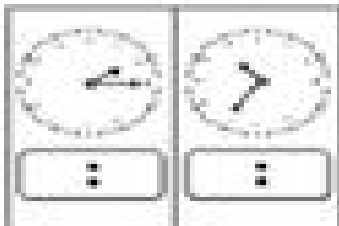
Subtraction

Find the difference for each problem below.

51	73	63
-23	-48	-35
\hline	\hline	\hline

Time

Write the times shown on the clocks.

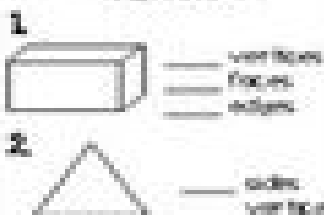


 :

 :


Shapes

Answer the questions about the shapes below.



Place Value

Write the number in expanded form.



Word Problem

Answer the problem below. Show your work.

The grocery store carries 6 oranges, 4 apples, and 8 bananas. How much fruit did she have in all?

add

subtract

$\text{ } + \text{ } = \text{ }$

Fact Families

Using the numbers below, create a fact family.

10	5	25
$\text{ } + \text{ } = \text{ }$	$\text{ } + \text{ } = \text{ }$	$\text{ } + \text{ } = \text{ }$
$\text{ } - \text{ } = \text{ }$	$\text{ } - \text{ } = \text{ }$	$\text{ } - \text{ } = \text{ }$
$\text{ } - \text{ } = \text{ }$	$\text{ } - \text{ } = \text{ }$	$\text{ } - \text{ } = \text{ }$