

Name _____ Date _____

Math

1. $3 - 2 =$ 1. $2 \times 2 =$
 2. $4 + 6 =$ 2. $2 \times 8 =$
 3. $10 - 7 =$ 3. $3 \times 4 =$
 4. $15 - 8 =$ 4. $9 \div 3 =$

5. $16 + 17 =$ 5. $10 \div 2 =$
 6. $5 + 7 =$ 6. $5 \times 5 =$
 7. $6 + 13 =$ 7. $25 \div 5 =$
 8. $9 - 6 =$ 8. $18 \div 3 =$
 9. $23 + 14 =$ 9. $6 \times 4 =$
 10. $37 + 18 =$ 10. $9 \times 5 =$
 11. $97 - 54 =$ 11. $21 \div 7 =$
 12. $72 + 45 =$ 12. $63 \div 9 =$

Name _____ Date _____

Word Problems

1. Tom went to the store to buy a can of peaches. A can of peaches cost \$1.25. Tom has \$2.00. How much change will Tom get? _____

2. On the way to school Beth found a nickel on the ground. At lunch she found a quarter. Walking home she found a penny. How much money did Beth find? _____

Name _____ Date _____

Grammar

A **Noun** – a person, place or thing

Write the noun on the line below.

1. Sue is running.


2. The cat is brown.

3. The store is closed.



Name _____ Date _____

Science

Matter is all around us and it is made of atoms and molecules.


What is Matter? 

What are the parts of an atom?

Name _____ Date _____

Life Cycle of Frog



Metamorphous is the change a frog goes through during their life cycle as they change from a tadpole to an adult frog

Name _____ Date _____

Writing

Write about your favorite hobby.

- Math
- English
- Writing
- Science
- History
- Geography
- Art
- Music

MyFroggyStuff.
 blogspot.com