
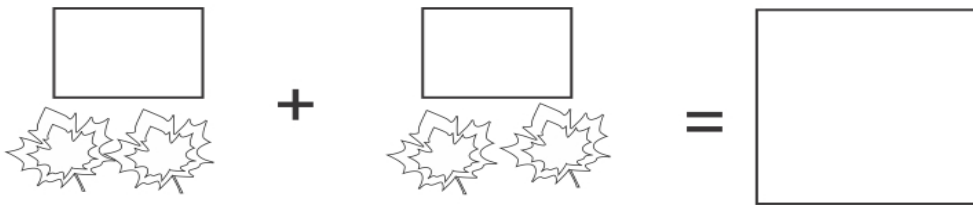



Thanksgiving Math Worksheet

Count the images. Write the number of images in the boxes above each image and write the total number in the last box.

$$\boxed{} + \boxed{} = \boxed{}$$


$$\boxed{} + \boxed{} = \boxed{}$$


$$\boxed{} + \boxed{} = \boxed{}$$


$$\boxed{} + \boxed{} = \boxed{}$$
