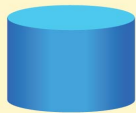



WHAT SHAPE IS IT?


Name: _____

Score: _____



















Identify and name the following 3D shapes