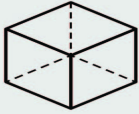


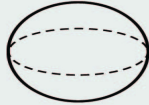
# WHAT SHAPE IS IT?

Name: \_\_\_\_\_

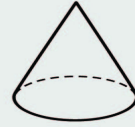
Score: \_\_\_\_\_



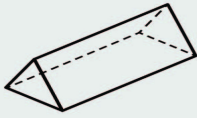
\_\_\_\_\_



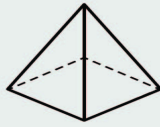
\_\_\_\_\_



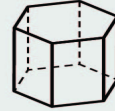
\_\_\_\_\_



\_\_\_\_\_



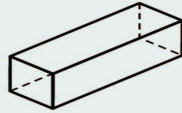
\_\_\_\_\_



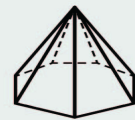
\_\_\_\_\_



\_\_\_\_\_



\_\_\_\_\_



\_\_\_\_\_

Identify and name the following 3D shapes