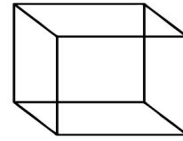
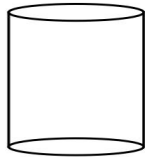


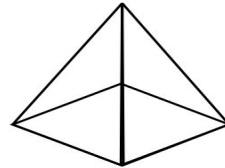
This solid shape is a _____. A _____ has
_____ face, _____ edges, and _____ vertex.



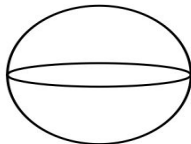
This solid shape is a _____. A _____ has
_____ faces, _____ edges, and _____ vertices.




This solid shape is a _____. A _____ has
_____ face, _____ edges, and _____ vertex.



This solid shape is a _____. A _____ has
_____ face, _____ edges, and _____ vertex.



This solid shape is a _____. A _____ has
_____ faces, _____ edges, and _____ vertices.



This solid shape is a _____. A _____ has
_____ faces, _____ edges, and _____ vertices.