



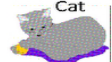


Name: \_\_\_\_\_

Make a bar graph to show how many of each type of pets there are.



Number of Pets					
6					
5					
4					
3					
2					
1					
0					
	Dog 	Rabbit 	Chick 	Fish 	Cat 

1. How many Rabbits are there?

2. How many fewer chicks are there than Fishes?

3. List the pets in order , from fewer to more