














HALLOWEEN PICTURE PUZZLE

EACH SALAMANDER HAS A VALUE SHOWN IN THE BOXES BELOW.

	2		3		1		4
---	---	---	---	---	---	--	---

WORK OUT THE TOTAL OF EACH HORIZONTAL AND VERTICAL LINE OF SALAMANDERS.

				= 11
				= _
				= _
				= _
= _	= _	= _	= _	