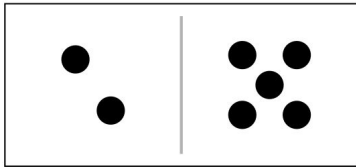
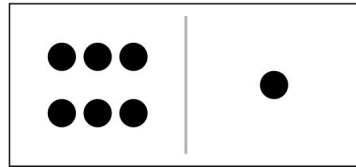


# Domino Addition Up to 10

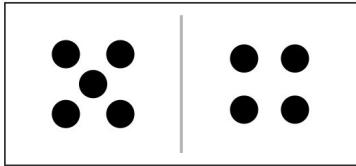
**INSTRUCTION:** Count and write how many dots are on each half of the domino. Next, add the numbers together to discover the total numbers of dots on each domino.



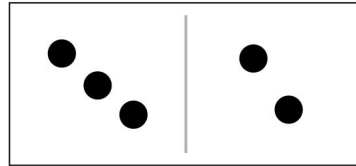
$$\underline{\quad} + \underline{\quad} = \square$$



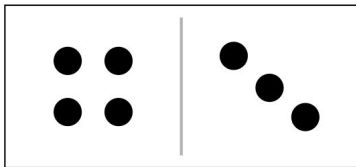
$$\underline{\quad} + \underline{\quad} = \square$$



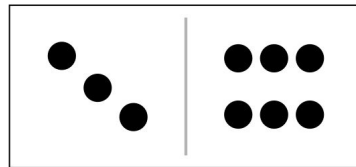
$$\underline{\quad} + \underline{\quad} = \square$$



$$\underline{\quad} + \underline{\quad} = \square$$



$$\underline{\quad} + \underline{\quad} = \square$$



$$\underline{\quad} + \underline{\quad} = \square$$