








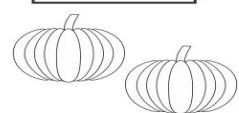
Fall Math Worksheet

Count the images. Write the number of images in the boxes above each image and write the total number in the last box.

<input type="text"/>		<input type="text"/>		<input type="text"/>
	+		=	<input type="text"/>

<input type="text"/>		<input type="text"/>		<input type="text"/>
	+		=	<input type="text"/>

<input type="text"/>		<input type="text"/>		<input type="text"/>
	+		=	<input type="text"/>

<input type="text"/>		<input type="text"/>		<input type="text"/>
	+		=	<input type="text"/>