



My Pumpkin Investigation

How many cubes tall is the pumpkin?

ESTIMATE

ACTUAL




How heavy is the pumpkin?

_____ POUNDS

It is heavier than a:


How many inches around is the pumpkin?



ESTIMATE

ACTUAL

Does the pumpkin sink or float?



Three words to describe the pumpkin are:

- 1.
- 2.
- 3.