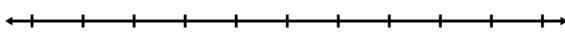
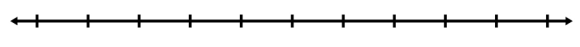
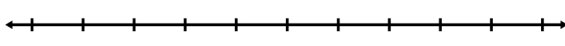
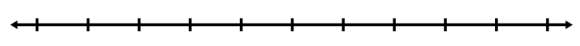
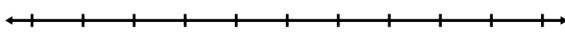
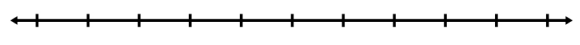
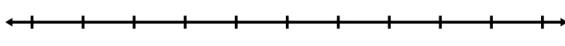
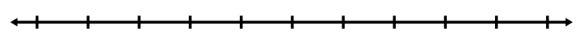
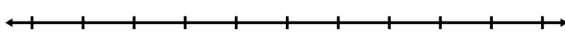
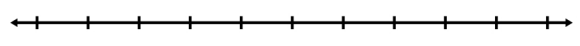
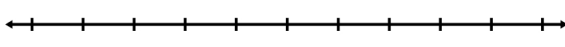
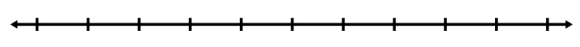


Name:

Date:

Blank Number line Worksheet


 $\square + \square = \square$ 
 $\square - \square = \square$ 
 $\square - \square = \square$ 
 $\square + \square = \square$ 
 $\square + \square = \square$ 
 $\square - \square = \square$ 
 $\square - \square = \square$ 
 $\square + \square = \square$ 
 $\square + \square = \square$ 
 $\square - \square = \square$ 
 $\square - \square = \square$ 
 $\square + \square = \square$