

Week 1: Day 1

Addition

Find the sums for each problem below.

38	67	85
$+24$	$+24$	$+48$
\hline	\hline	\hline

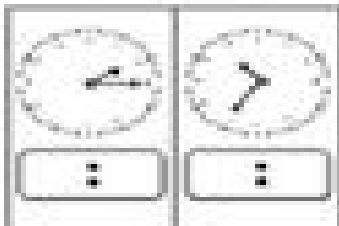
Subtraction

Find the difference for each problem below.

51	73	63
-23	-48	-35
\hline	\hline	\hline

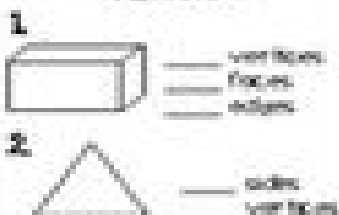
Time

Write the times shown on the clocks.




Shapes

Answer the questions about the shapes below.



Place Value

Write the number in expanded form.



Word Problem

Answer the problem below. Show your work.

The girl had 10 apples, 6 oranges, and 8 bananas. How much fruit did she have in all?

add
subtract

\hline	\hline	$=$	\hline
----------	----------	-----	----------

Use a number line to solve the problem.

Fact Families

Using the numbers below, create a fact family.

10	5	25
\hline	\hline	\hline
\hline	\hline	\hline
\hline	\hline	\hline
\hline	\hline	\hline