










Count The Candies

One couple is equal to two. There are a couple of candies in each bunch. Count the total number of candies in each row and write them down.

Row 1:    = _____

Row 2:   = _____

Row 3:    = _____
 

Row 4:    = _____
 

Row 1: 6 candies, Row 2: 4 candies, Row 3: 6 candies, Row 4: 6 candies
 1st Grade Math