

















NAME: _____ DATE: _____

Spongebob Addition

Write the correct answer to each addition problem in the box.

 +  <input data-bbox="651 555 786 678" type="text"/>	 +  <input data-bbox="1281 555 1417 678" type="text"/>
 +  <input data-bbox="651 831 786 954" type="text"/>	 +  <input data-bbox="1281 831 1417 954" type="text"/>
 +  <input data-bbox="651 1106 786 1229" type="text"/>	 +  <input data-bbox="1281 1106 1417 1229" type="text"/>
 +  <input data-bbox="651 1382 786 1505" type="text"/>	 +  <input data-bbox="1281 1382 1417 1505" type="text"/>