


Variety of Triangles

Tracing Practice

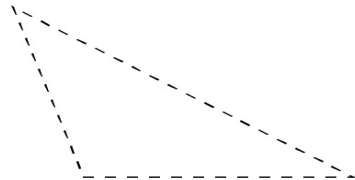

WORKSHEETS
Trace these shapes
and their names!

My name is _____

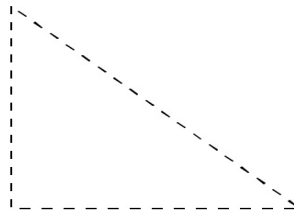
Date _____




Isosceles



Scalene



Right Angle



Equilateral