


Name _____




Dice Addition!



Roll your dice and add them together. Write the number outside each box.


$$\bigcirc + \bigcirc = \bigcirc$$

$$\bigcirc + \bigcirc = \bigcirc$$




$$\bigcirc + \bigcirc = \bigcirc$$

$$\bigcirc + \bigcirc = \bigcirc$$



$$\bigcirc + \bigcirc = \bigcirc$$



$$\bigcirc + \bigcirc = \bigcirc$$