

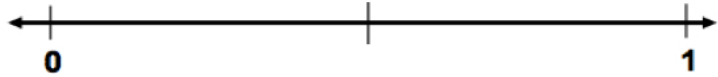
ORDERING FRACTIONS

Partner A _____

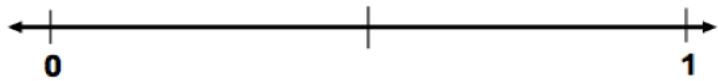
Partner B _____

Work with a partner to complete this activity. For each set of fractions, each person draws a number line on his or her dry erase board and places the fractions where they belong. Compare with your partner. If you don't agree, draw pictures or use another strategy to figure out the proper position of each fraction. Finally, write your answers on the number lines below.

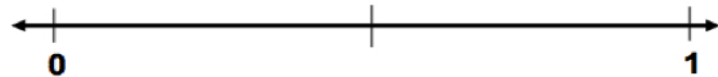
1 $\frac{3}{4}$ $\frac{2}{4}$ $\frac{1}{4}$



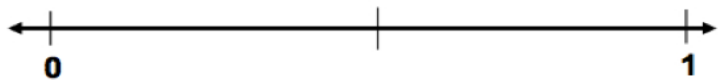
2 $\frac{4}{8}$ $\frac{4}{10}$ $\frac{4}{5}$



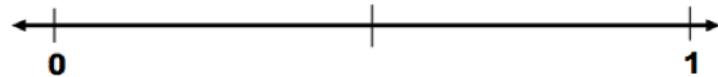
3 $\frac{3}{6}$ $\frac{1}{4}$ $\frac{2}{3}$



4 $\frac{1}{10}$ $\frac{1}{2}$ $\frac{1}{5}$



5 $\frac{5}{7}$ $\frac{1}{3}$ $\frac{5}{10}$



6 $\frac{2}{10}$ $\frac{3}{4}$ $\frac{2}{8}$

