
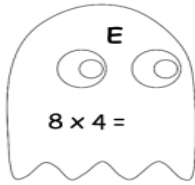
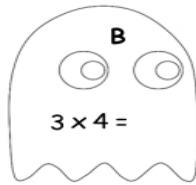
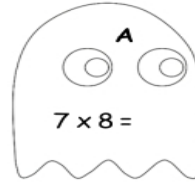
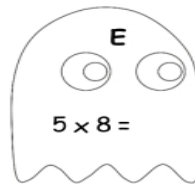
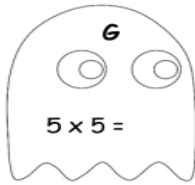
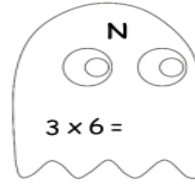
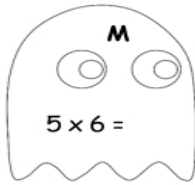



Name: _____

Date: _____

GHOST MULTIPLICATION



Which ghost is the best dancer?

$\frac{T}{36}$ $\frac{14}{40}$ $\frac{12}{4}$ $\frac{8}{25}$ $\frac{21}{32}$ $\frac{30}{56}$ $\frac{18}{18}$!