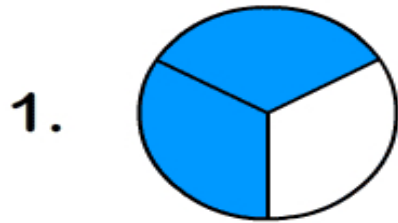



Circle the correct fraction from the given choices.



$$\frac{3}{4}$$

$$\frac{2}{3}$$


$$\frac{1}{4}$$



$$\frac{3}{4}$$

$$\frac{1}{5}$$


$$\frac{2}{3}$$



$$\frac{2}{4}$$

$$\frac{4}{5}$$

$$\frac{5}{6}$$



$$\frac{4}{8}$$

$$\frac{1}{3}$$

$$\frac{1}{2}$$