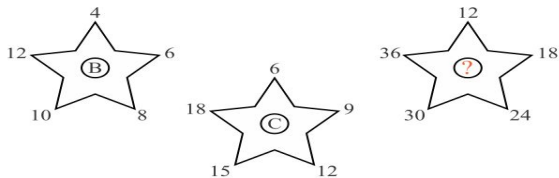


Name: \_\_\_\_\_

Date: \_\_\_\_\_

# LOGIC LETTER PUZZLE

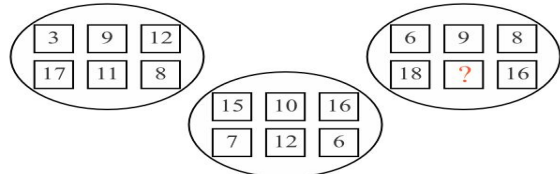
1. Which letter completes this pattern?



Answer: F

The numbers around the star are multiples of 6 (=F).

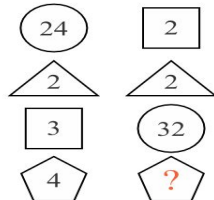
2. Which number completes this number sequence?



Answer: 15

The sum of the vertical pairs in the 3rd oval is 24.

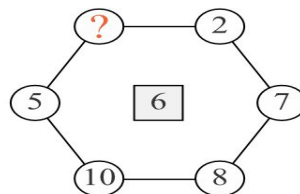
3. What is the missing number in the shape pattern?



Answer: 8

The 1 digit numbers in each column multiply to the number in the circle.

4. What is the missing number in this pattern?



Answer: 4

The average of the opposite number pairs is 6.

5. What number completes the sequence?

3	5	10	12
9	7	16	14
6	8	7	9
12	?	13	11

Answer : 10

The cells in the squares are following a + 2 pattern.

6. Which letter completes the pattern?

C	4
2	A
9	?
6	E
Y	26

Answer : H

The number is 1 more than the value of the letter number in each row.