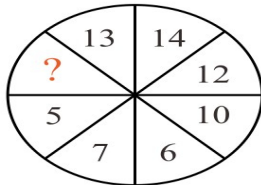


Name: _____

Date: _____

MATH BRAIN TEASERS

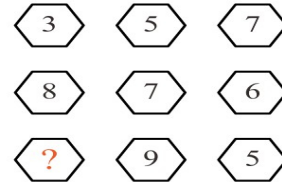
1. Which 1 digit-number is missing?



Answer: 3

The difference between the opposite numbers is 7.

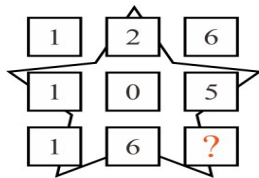
2. Which number completes the pattern?



Answer: 13

The average of 13 + 5 is 9.

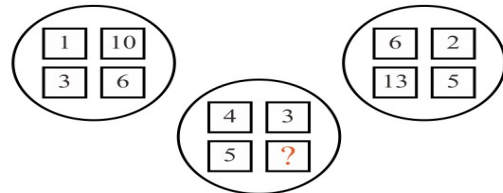
3. What is the number needed to complete this pattern?



Answer: 8

The first 2 cells in a row divided by 2 form the value of the 3rd cell.

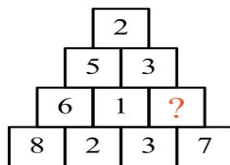
4. Which number completes the sequence?



Answer: 12

The numbers 4, 3 and 5 add up to 12.

5. Which number is needed to complete the pyramid?



Answer: 4

The difference between 3 and 7.

6. Which 4 numbers will complete this addition puzzle ?

6	+		=	14	Ⓐ	16 , 9 , 7 and 13
+		+		+	Ⓑ	13 , 8 , 7 and 16
	+	9	=		Ⓒ	13 , 8 , 7 and 14
=		=		=		
	+	17	=	30		

Answer: B

Fill in the numbers to check.