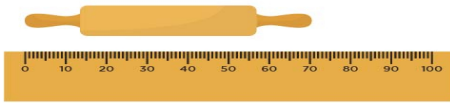


Measurement & Data Worksheets

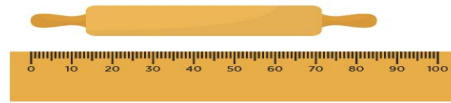
Name: _____

Use your knowledge of the number system to read these scales which are going up ones, fives and tens. Remember to include the units of measurement.

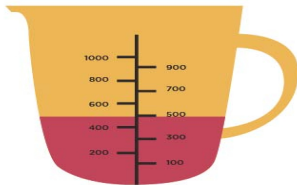
1. How long? mm



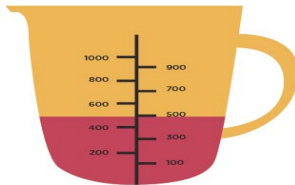
2. How long? mm



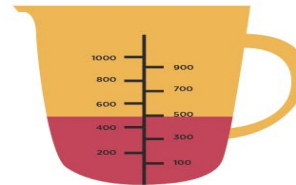
3. How many? ml



4. How many? ml



5. How many? ml



6. How heavy? g



7. How heavy? g



8. How heavy? g

