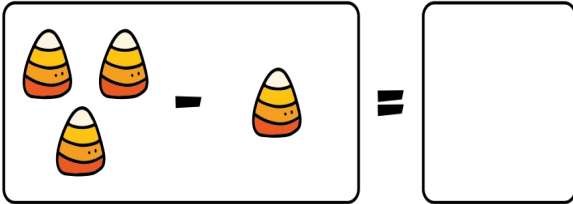


Name: _____


Date: _____

SUBTRACTION CANDY CORN

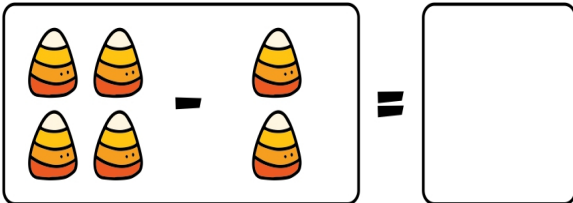
Count the candy corn and subtract.




3 candy corn minus 1 candy corn equals an empty box.




6 candy corn minus 2 candy corn equals an empty box.



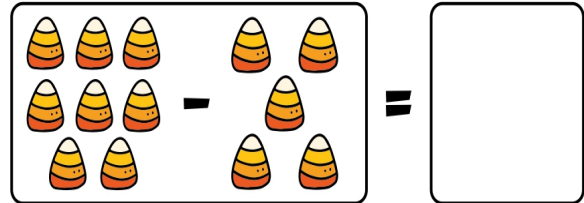
5 candy corn minus 2 candy corn equals an empty box.




6 candy corn minus 3 candy corn equals an empty box.




5 candy corn minus 3 candy corn equals an empty box.



8 candy corn minus 4 candy corn equals an empty box.



5 candy corn minus 4 candy corn equals an empty box.



7 candy corn minus 4 candy corn equals an empty box.