



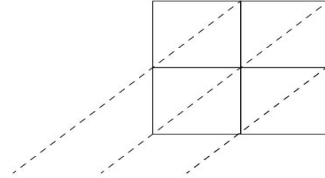
HALLOWEEN

Multiplication Word Problems

1

12 Children went trick-or-treating.

Each child got 24 pieces of candy.
How many pieces of candy did they
have in all?

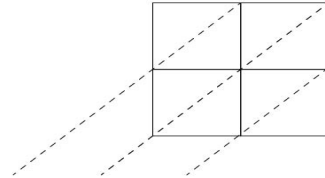


Answer

2

There are 28 children in Miss Becky's
classroom. Miss Becky gave each child
1 cupcake, 5 candycorns and
10 chocolate candies.

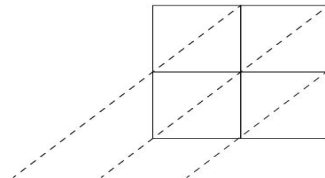
How many sweet treats did
Miss Becky give out all together?



Answer

3

13 black cats each had 13 kittens!
How many kittens were there?



Answer