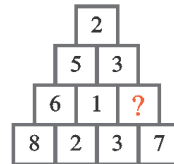


Math Brain Teasers

1. Which number completes the sequence ?




2. Which number is needed to complete the pyramid ?



3. Which number completes the pattern ?



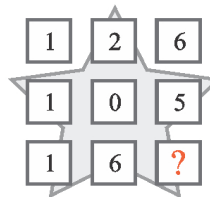
4. Which 1 digit-number is missing?



5. Which 4 numbers will complete this addition puzzle ?

6	+		=	14	<input type="radio"/> (A) 16, 9, 7 and 13 <input type="radio"/> (B) 13, 8, 7 and 16 <input type="radio"/> (C) 13, 8, 7 and 14
+		+		+	
	+	9	=		
=		=		=	
	+	17	=	30	

6. What is the number needed to complete this pattern ?



Answer:

<p>puzzle 1 : 12 The numbers 4, 3 and 5 add up to 12.</p>	<p>puzzle 2 : 4 The difference between 3 and 7.</p>
<p>puzzle 3 : 13 The average of 13 + 5 is 9.</p>	<p>puzzle 4 : 3 The difference between the opposite numbers is 7.</p>
<p>puzzle 5 : B Fill in the numbers to check.</p>	<p>puzzle 6 : 8 The first 2 cells in a row divided by 2 form the value of the 3rd cell.</p>