

# THANKSGIVING ODD EVEN

Count the items in each group. Tell whether there is an odd number or even number of each object.


1.



How many? \_\_\_\_\_

Odd or even? \_\_\_\_\_


2.



How many? \_\_\_\_\_

Odd or even? \_\_\_\_\_

3.



How many? \_\_\_\_\_

Odd or even? \_\_\_\_\_


4.



How many? \_\_\_\_\_

Odd or even? \_\_\_\_\_

5.



How many? \_\_\_\_\_

Odd or even? \_\_\_\_\_