







HALLOWEEN MATH WORKSHEET

Count the images. Write the number of images in the boxes above each image and write the total number in the last box.

<input type="text"/>	+	<input type="text"/>	=	<input type="text"/>
				

<input type="text"/>	+	<input type="text"/>	=	<input type="text"/>
				

<input type="text"/>	+	<input type="text"/>	=	<input type="text"/>
				

<input type="text"/>	+	<input type="text"/>	=	<input type="text"/>
