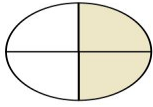


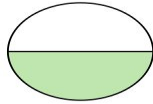
Determine which letter best describes the shaded portion.

1)



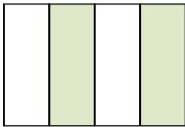
- A. four quarters
- B. two quarters
- C. two halves

6)




- A. three-fourths
- B. one half
- C. four quarters

2)



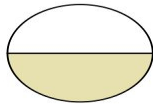
- A. three quarters
- B. two quarters
- C. four quarters

7)



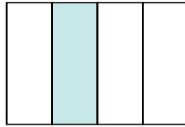
- A. three-fourths
- B. two halves
- C. one half

3)



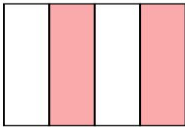
- A. one half
- B. two halves
- C. four-fourths

8)



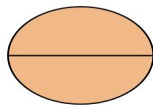
- A. two quarters
- B. three-fourths
- C. one quarter

4)



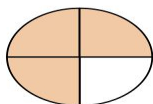
- A. four-fourths
- B. two-fourths
- C. one quarter

9)



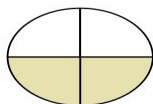
- A. two halves
- B. three quarters
- C. one half

5)



- A. one half
- B. two quarters
- C. three-fourths

10)



- A. three quarters
- B. one quarter
- C. two-fourths

Answers

1. **B**

2. **B**

3. **A**

4. **B**

5. **C**

6. **B**

7. **B**

8. **C**

9. **A**

10. **C**