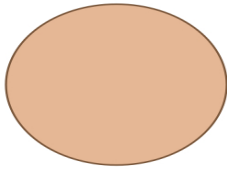


Name : _____

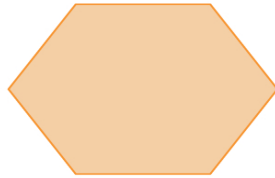
Identifying & Naming 2D Shapes

Identify each 2D shape and write its name.

1)



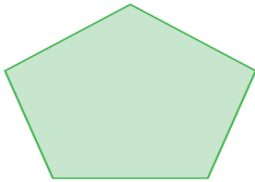
2)



3)



4)




5)




6)



7)



8)



9)

